


IDENTIFYING FRACTIONS

NAME _____

DATE _____











Riddle 1

What should you do when two snails start fighting?



What To Do

Fill in the blanks with the correct answer. Match each answer to a letter in the Key. Then write the letter in the space above its problem number to find the answer to the riddle.

- | | |
|---|--|
| <p>1 This pizza is divided into _____ equal slices. </p> <p>2 This pizza is divided into _____ equal slices. </p> <p>3 This pizza is divided into _____ equal slices. </p> <p>4 This pizza is divided into _____ equal slices. </p> <p>5 This pizza is divided into _____ equal slices. </p> | <p>6 This pizza is divided into _____ equal slices. </p> <p>7 This pizza is divided into _____ equal slices. </p> <p>8 This pizza is divided into _____ equal slices. </p> <p>9 This pizza is divided into _____ equal slices. </p> <p>10 This pizza is divided into _____ equal slices. </p> |
|---|--|

Key

20 A	4 O	11 X
3 T	50 F	9 T
8 U	7 G	18 B
10 U	16 E	2 M
6 S	12 I	5 L

Riddle Answer Let the 2 4 8 7 9 5 6 1 3 10